

සියලුම හිමිකම් ඇවිරිණි]
 முழுப் பதிப்புரிமையுடையது]
 All Rights Reserved]

ශ්‍රී ලංකා විභාග දෙපාර්තමේන්තුව / இலங்கைப் பரீட்சைத் திணைக்களம் / Department of Examinations, Sri Lanka

Sri Lanka Law College Entrance Examination – 2020 (June 2019)


(02) General Knowledge and Intelligence

(Two hours)

Part I – General Knowledge

Instructions to candidates

Very Important :



* When answering write down the digits as mentioned below.

0 1 2 3 4 5 6 7 8 9

Write your Index Number here and on
pages 3 in the space indicated.

.....

Checked as correct

.....

Invigilator's Initials

Important :

- * Subject No.(02) General Knowledge and Intelligence paper consists of two parts as Part I–General Knowledge and Part II – Intelligence.
- * The time allowed for both parts is two hours.
- * Part I–General Knowledge paper consists of 50 questions on 05 pages.
- * Answer all the questions on this paper itself.
- * Commence answering only after the Centre Supervisor's announcement.
- * Instructions given should be strictly followed in answering this paper and marks will not be awarded for answers not in accordance with these instructions.
- * Even if you are not attempting the paper hand it over to the Supervisor.
- * Write the answers clearly and legibly in blue or black ink only and not in pencil.
- * It is an offence to remove this paper from the examination hall or turn out photocopies of the same.
- * Answer scripts with illegible figures, illegible handwriting and those where erasing fluid has been used will not be marked / evaluated.

For Examiner's use only

Page No.	Question Nos.	Marks Awarded
2	1 – 12	
3	13 – 25	
4	26 – 40	
5	41 – 50	
Total		

Final Score

In figures	
In words	

Answer Script Marked By	
Checked By	
Chief Examiner	

- For each of the question No. 1 to 30, select the **correct** or the **most appropriate** or the **closest answer** and write the **number** of the relevant choice **on the dotted line** provided.
1. According to the Socio Economic Data – 2018, of the Central Bank of Sri Lanka what is the population density of Sri Lanka per square kilometre?
(1) 315 (2) 324 (3) 332 (4) 342 (.....)
 2. What was the year in which Sri Lanka enacted the Extradition Law for the first time?
(1) 1972 (2) 1974 (3) 1977 (4) 1978 (.....)
 3. According to the 2019 Annual Budget of Sri Lanka how many new Samurdhi beneficiaries are expected to be enrolled?
(1) 400000 (2) 450000 (3) 500000 (4) 600000 (.....)
 4. What is the main reason among the choices given below, for the long life expectancy of the Sri Lankans?
(1) High Literacy rate (2) State Welfarism
(3) Hygienic Facilities (4) Good Dietary habits (.....)
 5. Which one of the following is **not** a Department comes under the Ministry of Justice and Prison Reforms?
(1) Government Analyst's Department (2) Criminal Investigation Department
(3) Department of Public Trustee (4) Legal Draftsman's Department (.....)
 6. In formulating the 1978 Constitution of Sri Lanka, Executive Presidential system included in it has been mainly influenced by the
(1) French Presidential System. (2) American Presidential System.
(3) Russian Presidential System. (4) Indian Presidential System. (.....)
 7. The first Sri Lankan to be appointed as the Chief Justice in Sri Lanka was
(1) Sir Edward Jayatilake. (2) Mr. Arthur Wijewardena.
(3) Mr. Hema Basnayake. (4) Mr. M. Sansoni (.....)
 8. Which one of the following is **not** within the jurisdiction of a Magistrate Court?
(1) Post-mortem Examinations
(2) Issue of search warrants
(3) Power to issue writ
(4) Ordering persons to enter into bonds of good character (.....)
 9. What is the number of subjects in the thirteen year Guaranteed Education Programme introduced for school children after the General Certificate of Education (Ordinary Level) Examination?
(1) 25 (2) 26 (3) 27 (4) 28 (.....)
 10. According to the Department of Census and Statistics, overall Computer Literacy rate in Sri Lanka in the first six months of 2018 was
(1) 27%. (2) 27.5%. (3) 29%. (4) 30.5%. (.....)
 11. Who was the great Sri Lankan Tamil Leader who worked towards national unity in Sri Lanka?
(1) Sir Ponnambalam Ramanathan (2) Mr. Ponnambalam Arunachalam
(3) Sir Arunachalam Mahadeva (4) Mr. G.G. Ponnambalam (.....)
 12. Which one of the following is a **mismatch**?
(1) Sir D.B. Jayatilake – Politics (2) Father Peter Pillai – Education
(3) Mr. Jeffrey Bawa – Architecture (4) Mr. E.W. Perera – History (.....)



13. The longest railway fly-over bridge in Sri Lanka has been built between
 (1) Nanu oya and Badulla (2) Matara and Beliatta
 (3) Anuradhapura and Jaffna (4) Galoya junction and Batticaloa (.....)
14. How many Administrative Districts are there in Sri Lanka?
 (1) 22 (2) 23 (3) 24 (4) 25 (.....)
15. The year in which tobacco cultivation will be banned in Sri Lanka is
 (1) 2020. (2) 2021. (3) 2022. (4) 2023. (.....)
16. According to the Global Peace Index the most peaceful country in 2018 was
 (1) Denmark. (2) Iceland. (3) Japan. (4) Canada. (.....)
17. Which one of the following is the name of the Japanese Parliament?
 (1) Diet (2) Duet (3) Duma (4) Majlis (.....)
18. Which country in Asia is called the 'Graveyard of Empires'?
 (1) India (2) China (3) Afghanistan (4) Pakistan (.....)
19. The most harmful effect of Globalization is the
 (1) fading away of smaller cultures.
 (2) people getting used to conspicuous consumption.
 (3) job insecurity of people.
 (4) increased competition among people. (.....)
20. Which one of the following is **not** a Soft Skill?
 (1) Communication (2) Critical thinking (3) Work ethics (4) Data analysis (.....)
21. Which one of the following is only an opinion?
 (1) Most innovations in the world were created by the Chinese until the Middle Ages.
 (2) Most scientific research commenced after the Industrial Revolution.
 (3) Most Developing countries do not adhere to the rule of law.
 (4) Most countries with STEM subjects (Science, Technology, Engineering, Mathematics) have leapfrogged in development. (.....)
22. The country which is **not** a permanent member of the UN Security Council is
 (1) United Kingdom. (2) United States of America.
 (3) France. (4) Germany. (.....)
23. Who made the statement that "Injustice anywhere is a threat to justice everywhere"?
 (1) Martin Luther King (2) Nelson Mandela
 (3) His Holiness Pope Francis (4) Theodore Roosevelt (.....)
24. The European city known for its 'high culture' is
 (1) Paris. (2) London. (3) Brussels. (4) Geneva. (.....)
25. The Big Bang theory explains the
 (1) origin of the Universe. (2) origin of the Planets.
 (3) origin of the Sun. (4) origin of Galaxies. (.....)

26. The first Truth Commission to investigate the violation of Human Rights was established in 1983 in
(1) Argentina. (2) South Africa. (3) Sri Lanka. (4) Ukraine. (.....)
27. What is the name of the country which is responsible for highest emission of carbon dioxide in the world?
(1) United States of America (2) China
(3) Russia (4) India (.....)
28. Who introduced the 'laissez faire' theory in economics?
(1) Adam Smith (2) Alfred Marshall (3) J.S. Mill (4) Robert Malthus (.....)
29. The Asian Games in 2022 will be held in
(1) Japan. (2) India. (3) South Korea. (4) China. (.....)
30. What is the name of the European country which has urged Jews not to wear skullcap in public places by the government?
(1) France (2) Germany (3) Italy (4) United Kingdom (.....)

● For each question from No. 31 to 50 write the correct answer in brief, on the dotted line provided.

31. With the advice and consent of which institution the President of Sri Lanka appoints a Judge of Supreme Court?
.....
32. What was the year in which Sri Lanka came to be known as the 'Democratic Socialist Republic of Sri Lanka'?
.....
33. By provisions of which Act Parliament of Sri Lanka, the Labour Tribunals were established?
.....
34. What is the name of the main State institution which recommends legal reforms in Sri Lanka?
.....
35. What is the highest plateau in Sri Lanka?
.....
36. What is the name of the largest Island belonging to Sri Lanka?
.....
37. Above what age is a Last Will can be executed by a person of sound mind?
.....
38. What is the principal judicial institution of the United Nations Organization (UNO)?
.....
39. What is the type of the Writ requiring a person under arrest or custody to be brought before a Court?
.....
40. What is considered to be the most remarkable technological creation in ancient Tank building of this country?
.....



41. What is the country in which a dead language is being used as its official language since 1949?

.....

42. What is the country reckoned as 'The World Factory'?

.....

43. What is the name of the most ancient Code of Ethics for Western Doctors?

.....

44. What is the name of the institution monitoring the International Trade?

.....

45. What is the country in which the Cannes Film Festival being held annually?

.....

46. State **one** of the components of the UN Human Development Index.

.....

47. Who was the first Olympic medal winner of Sri Lanka?

.....

48. Who is regarded as the 'Father of International Law'?

.....

49. Who is the creator of the Wikileaks web?

.....

50. What is the name of the Asian country which has a policy of 'Military first'?

.....

* * *



සියලුම හිමිකම් ඇවිරිණි]
முழுப் பதிப்புரிமையடையது]
All Rights Reserved]

ශ්‍රී ලංකා විභාග දෙපාර්තමේන්තුව / இலங்கைப் பரீட்சைத் திணைக்களம் / Department of Examinations, Sri Lanka

Sri Lanka Law College Entrance Examination – 2020 (June 2019)

(02) General Knowledge and Intelligence

Two hours

Part II – Intelligence

Instructions to candidates

Very Important :

Do not use Pencil
to write answers.



* When answering write down the digits as mentioned below.

0 1 2 3 4 5 6 7 8 9

Write your Index Number here and on
pages 3 and 5 in the space indicated.

.....

Checked as correct

.....

Invigilator's Initials

Important :

- * Subject No.(02) General Knowledge and Intelligence paper consists of two parts as Part I–General Knowledge and Part II – Intelligence.
- * The time allowed for both parts is two hours.
- * Part II–Intelligence paper consists of 50 questions on II pages.
- * Answer all the questions on this paper itself.
- * Commence answering only after the Centre Supervisor's announcement.
- * Handover the answer script I and II separately.
- * Calculators are not allowed.
- * Instructions given should be strictly followed in answering this paper and marks will not be awarded for answers not in accordance with these instructions.
- * Even if you are not attempting the paper hand it over to the Supervisor.
- * Write the answers clearly and legibly in blue or black ink only and not in pencil.
- * It is an offence to remove this paper from the examination hall or turn out photocopies of the same.
- * Answer scripts with illegible figures, illegible handwriting, those where erasing fluid has been used and written in pencil will not be marked / evaluated.

For Examiner's use only

Page No.	Question Nos.	Marks Awarded
2	1 – 6	
3	7 – 11	
4	12 – 20	
5	21 – 25	
6	26 – 30	
7	31 – 35	
8	36 – 40	
9	41 – 45	
10	46 – 48	
11	49 – 50	
Total		

Final Score

In figures	
In words	

Answer Script Marked By	
Checked By	
Chief Examiner	

● In the questions from No. 1 to 5 three words having a certain relationship are given at the first. Select the three words having the closest relationship to the given three words and write the **number** of the relevant choice **on the dotted line** given against the question.

1. wall : picture : clock
 (1) pen : pencil : blackboard (2) fence : ladder : parapet
 (3) table : vase : lamp (4) bus : car : bicycle (.....)
2. smile : laughter : crying
 (1) touch : hold : release (2) dawn : noon : evening
 (3) pinch : squeeze : touch (4) bend : break : paste (.....)
3. chair : bed : rest
 (1) canal : rivulet : water (2) river : sea : swim
 (3) whip : goad : noose (4) instant : moment : interval (.....)
4. large : huge : enormous
 (1) mind : brain : knowledge (2) head : apex : body
 (3) lake : sea : ocean (4) examine : search : observe (.....)
5. front : near : far
 (1) calm : nervous : commotion (2) start : middle : end
 (3) breeze : storm : wind (4) accusation : investigation : punishment (.....)

● Questions from No. 6 to 10 are based on the number grid given below.

❖ Here, boxes in every row and column should be filled with digits 1 to 6.

* No digit should be repeated in any of the rows or columns.

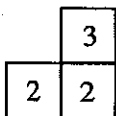
* Five areas in the grid named as (A), (B), (C), (D) and (E) are kept blank.

* Fill the boxes and answer the questions given below.

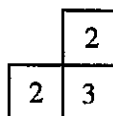
4	(A)	6	1	(B)	
(C)	5	(D)	6	(E)	
1	4	2	(F)	6	
5	1	3	6	2	
(G)	(H)	1	2	(I)	
2	(J)	4	3	1	5

Write the **number** of the correct choice **on the dotted line** in front of the question.

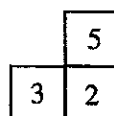
6. Which of the following figures can fill the area marked as (A)?



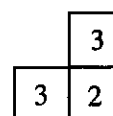
(1)



(2)



(3)



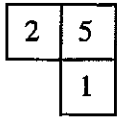
(4)

(.....)

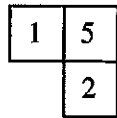
For rough work



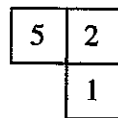
7. Which of the following figures can fill the area marked as (B)?



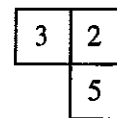
(1)



(2)



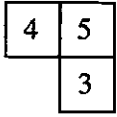
(3)



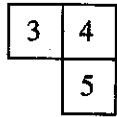
(4)

(.....)

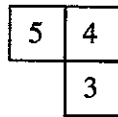
8. Which of the following figures can fill the area marked as (C)?



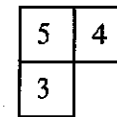
(1)



(2)



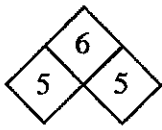
(3)



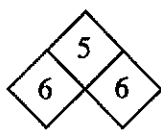
(4)

(.....)

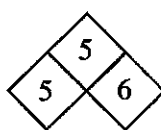
9. Which of the following figures can fill the area marked as (D)?



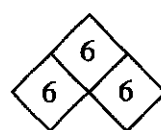
(1)



(2)



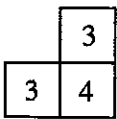
(3)



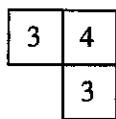
(4)

(.....)

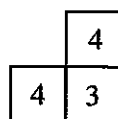
10. Which of the following figures can fill the area marked as (E)?



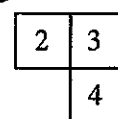
(1)



(2)



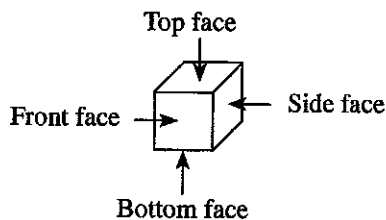
(3)



(4)

(.....)

• Questions from No. 11 to 15 are based on the following information.



* Shown above are four positions of the cube whose faces are marked with A, B, C, D, E, F. Accordingly, choose the correct answer from the choices given below for each question and write the **number** of the relevant choice on the **dotted line** given against the question.

11. Which one of the following pairs of letters are written on **two** opposite faces of the cube?

(1) A, D

(2) A, E

(3) A, F

(4) B, D

(.....)

For rough work


12. Which of the following pairs of letters appear on **two** opposite faces of the cube?
(1) *B, D* (2) *B, E* (3) *B, F* (4) *D, E* (.....)
13. Which of the following **three** letters that can be seen on the front face, on the top face and on a side face of the cube at a certain instance?
(1) *B, C, D* (2) *B, C, E* (3) *B, C, F* (4) *C, D, E* (.....)
14. In a certain instance the letters *A* and *B* appear on the front face and on a side face. In this instance one of the two letters appear on the top face is
(1) *C* or *D*. (2) *C* or *E*. (3) *C* or *F*. (4) *D* or *E*. (.....)
15. In one instance the letters *E* and *F* are seen on the front face and on a side face. In this instance one of the two letters that can be seen on the bottom face is
(1) *A* or *B*. (2) *A* or *C*. (3) *B* or *C*. (4) *C* or *D*. (.....)

- Questions from No. 16 to 20 are based on the information on kinship of few families given by complainants to a lawyer to solve a problem.

Accordingly, select the correct answer for each question and write the **number** of the relevant choice **on the dotted line** given against each question.

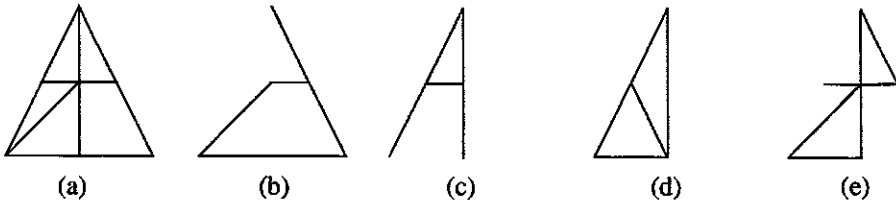
16. The complainant 'Sumith' showing Susila to the lawyer says
"Her husband is my brother-in-law, Sir". Accordingly, who is Sumith of Susila?
(1) Brother (2) Uncle (3) Father (4) Son-in-law (.....)
17. Meanwhile Sumith showing Vimala, a witness, says
"Sir, this lady's mother is my mother's only daughter." Accordingly, who is Sumith of Vimala?
(1) Uncle (2) Son-in-law (3) Brother-in-law (4) Husband (.....)
18. Sirini who appeared as a witness, showing Sumith says to the lawyer
"His only son is my son's father. Sir". Accordingly, who is Sumith of Sirini?
(1) Brother-in-law (2) Husband's father (3) Brother (4) Father (.....)
19. Meanwhile Ajith revealing Sirini's relationship says
"Her father's mother's daughter is married to my father's only son." Accordingly, who is Sirini of Ajith?
(1) Sister (2) Daughter (3) Sister-in-law (4) Daughter-in-law (.....)
20. Pramith, friend of Sumith, introducing Saumya to the lawyer says
"This is my father-in-law's only daughter's husband's brother's wife". Accordingly, who is Saumya of Pramith?
(1) Aunt (2) Daughter-in-Law (3) Sister-in-law (4) Daughter (.....)

For rough work



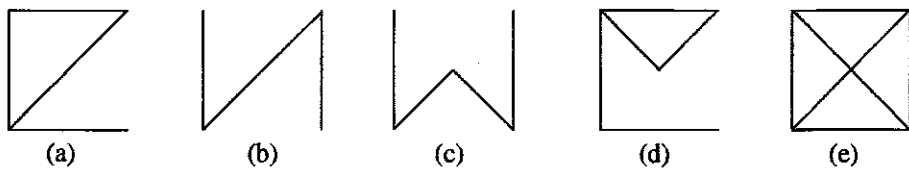
● In the questions from No. 21 to 23, five figures are given. When two of the figures are combined a third figure can be made. (Some lines may overlap) Select the choice that depicts the remaining two figures and write the **number** of the relevant choice on the **dotted line** given against the question.

21.



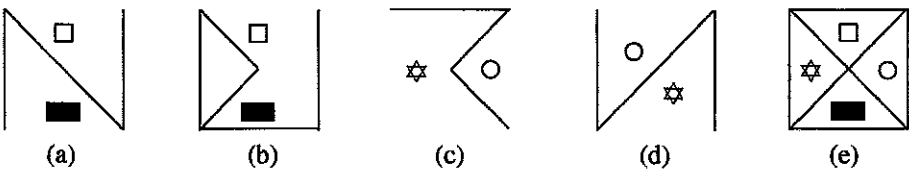
- (1) *a* and *b* (2) *b* and *c* (3) *b* and *e* (4) *d* and *e* (.....)

22.



- (1) *a* and *b* (2) *b* and *c* (3) *b* and *e* (4) *d* and *e* (.....)

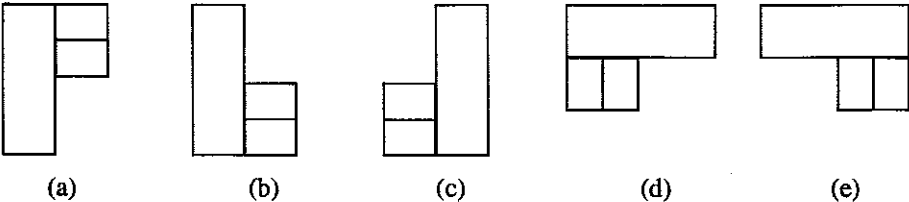
23.



- (1) *a* and *d* (2) *b* and *c* (3) *a* and *e* (4) *b* and *e* (.....)

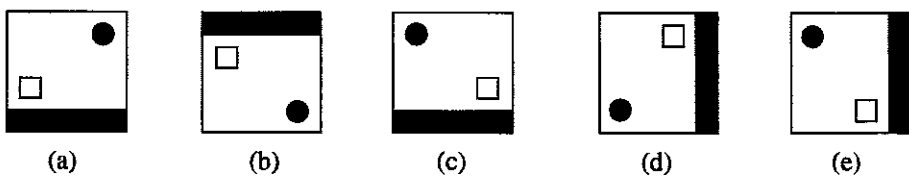
● In the questions No. 24 and 25, five figures are given in each. In **three** of the figures, there is a common relationship and it does not exist in two figures. Select the choice that shows the **two** figures that **does not** have the relationship and write the **number** of the relevant choice on the **dotted line** given against the question.

24.



- (1) *a* and *b* (2) *b* and *c* (3) *b* and *e* (4) *b* and *d* (.....)

25.



- (1) *a* and *b* (2) *a* and *e* (3) *b* and *e* (4) *d* and *e* (.....)

For rough work



- Questions from No. 26 to 30, are based on a secret code used for marking prices in a certain shop.
 - * An English letter is used for each digit mentioned in the price.
 - * Accordingly, six numbers written using those digits and six sets of equivalent English letters are given below.
 - * But the set of letters in front of each number is not the equivalent set of the letters. They are mixed at random.

Number	Secret Code (mixed at random)
328015	<i>FJAGDE</i>
475690	<i>KKACJG</i>
240879	<i>CBFJLE</i>
563210	<i>DCLAFG</i>
149352	<i>AGKEDF</i>
883462	<i>GCEKBL</i>

Accordingly, select the correct answer for each question and write the **number** of the relevant choice on the dotted line given against the question.

26. What is the digit depicted by letter *K*?
(1) 1 (2) 3 (3) 5 (4) 8 (.....)
27. What is the secret letter used for digit 2?
(1) *A* (2) *G* (3) *F* (4) *L* (.....)
28. What is the secret set of letters used for Rs. 2460 in that order?
(1) *AJKF* (2) *BDEL* (3) *GCJE* (4) *GCBL* (.....)
29. What is the correct order of the secret letters that should be used for 563210?
(1) *FJAGDE* (2) *FJAEDG* (3) *EDFGAJ* (4) *BCDEFA* (.....)
30. What is the answer depicting the digits and letters used for the blanks in the following number and the secret word in order?
- 46 - - 9 → A - J K - L
(1) 3, 7, 0, *D, F* (2) 3, 8, 0, *C, E* (3) 3, 5, 6, *C, E* (4) 4, 6, 0, *A, D* (.....)

For rough work



● Questions from No. 31 to 35, are based on nine defendants who stand in a row in a dock.

- * At the two ends of the row are two women.
- * There is a man at the middle.
- * No two women stood adjacent to each other.
- * There are not more than two men between two women.

Accordingly, select the correct answer for each question and write the **number** of the relevant choice on the dotted line given against the question.

31. How many men and women are there among the defendants in that order?
(1) 5 , 4 (2) 3 , 6 (3) 6 , 3 (4) 4 , 5 (.....)
32. How many occasions are there where two men are standing on either side of a woman?
(1) 1 (2) 2 (3) 3 (4) 4 (.....)
33. How many occasions are there where a man and a woman are standing on either side of a man?
(1) 1 (2) 2 (3) 3 (4) 4 (.....)
34. According to the order of standing of the defendants, how many possible ways are there for two adjacent defendants to swap their positions without breaking the above conditions?
(1) 1 (2) 2 (3) 3 (4) 4 (.....)
35. One defendant was acquitted during the hearing of the case. What is the probability as a fraction for that person to be a woman?
(1) $\frac{1}{9}$ (2) $\frac{2}{9}$ (3) $\frac{3}{9}$ (4) $\frac{4}{9}$ (.....)

For rough work



● Questions from No. 36 to 40, are based on the information on parking vehicles.

✦ There are 8 cubicles in the vehicle park. They are in two rows as A, B, C, D and E, F, G, H as shown in the figure below.



- * Seven drivers P, Q, R, S, T, U, V come here to park their vehicles.
- * In the park, cubicle G is inoperative.
- * Q does not like to park in the cubicle H.
- * Driver S parks in the cubicle in front of T.
- * Drivers V and U do not like to park in the same row horizontally next to each other.
- * V always parks the vehicle at one end.
- * Q parks his vehicle in the cubicle in front of U.
- * R parks his vehicle in the cubicle between the cubicles where P and Q park their vehicles.

Accordingly, select the correct answer for each question and write the **number** of the relevant choice on the dotted line given against the question.

36. In which cubicle does Q park his vehicle?
(1) B (2) E (3) F (4) H (.....)
37. Where does T park his vehicle?
(1) B (2) E (3) F (4) H (.....)
38. Who parks his vehicle between the vehicles of the drivers R and S?
(1) T (2) V (3) R (4) Q (.....)
39. What is the correct option which indicates the order of the owner of the vehicles parked in the row indicated as No. ①?
(1) S, Q, R, P (2) T, U, V, S (3) P, Q, R, T (4) S, R, Q, P (.....)
40. What is the correct option which indicates the order of the owner of the vehicles parked in the row indicated as No. ②?
(1) T, U, S, P (2) U, T, Q, R (3) T, U, -, V (4) V, U, -, T (.....)

For rough work



● Questions from No. 41 to 45, are based on a complaint on breaking a window of a house by throwing a stone by someone.

❖ Five suspicious children were questioned. They were Sameera, Ajith, Kamal, Amara and Kumara.

❖ Their answers were

* Sameera said that he did not do it.

* Kamal said that Ajith is the one who broke it.

* Ajith said that it was broken by Kamal.

* Kumara said that it may have been done either by Sameera or Kamal.

* Amara said that it was done by both Kumara and Sameera acting together.

According to the above information select the correct answer for each question and write the **number** of the relevant choice **on the dotted line** given against the question.

41. If **only one of the above statements is true** who could have broken the window?

(1) Ajith (2) Kamal (3) Ajith or Kamal (4) Kumara (.....)

42. If **only two of the statements are true** who could have done it?

(1) Ajith (2) Kamal (3) Kumara (4) Sameera (.....)

43. If **only three of the statements are true** who could have done it?

(1) Sameera (2) Ajith (3) Kamal (4) Kumara (.....)

44. Out of the children who made statements only one was involved with the breaking of the window, how many options are possible for **only one statement to be true** and all the others would be **false**?

(1) 1 (2) 2 (3) 3 (4) 4 (.....)

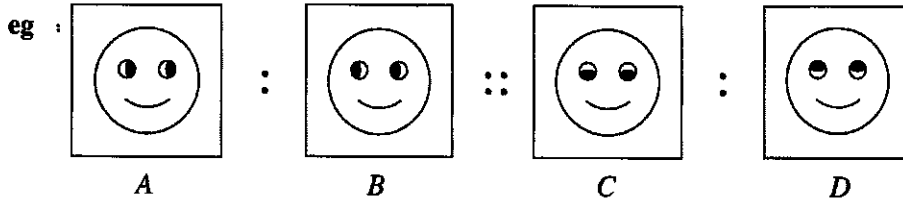
45. Out of the children who made statements only one was involved with the breaking of the window, how many options are possible for **only two statements to be true** and all the others would be **false**?

(1) 1 (2) 2 (3) 3 (4) 4 (.....)

For rough work



- Questions from No. 46 to 50, consist of two pairs of figures. They are shown in a pattern as $A : B :: C : D$, (B is to A as D is to C .) Study the figures and select the appropriate figure for the place D from the choices given and write the **number** of the relevant choice on the **dotted line** given against the question.



46. : :: : (.....)

(1) (2) (3) (4) (.....)

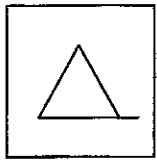
47. : :: : (.....)

(1) (2) (3) (4) (.....)

48. : :: : (.....)

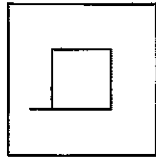
(1) (2) (3) (4) (.....)

49.



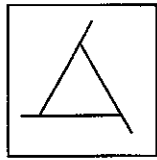
A

:




B

::

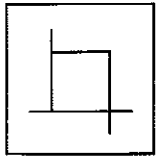


C

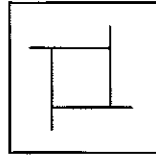
:



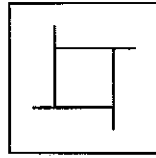
D



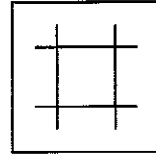
(1)



(2)



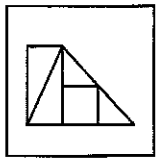
(3)



(4)

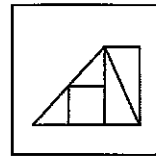
(.....)

50.



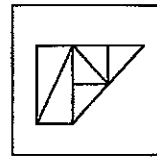
A

:




B

::

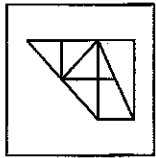


C

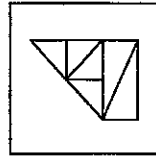
:



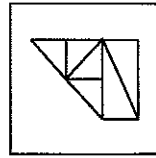
D



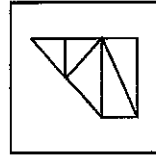
(1)



(2)



(3)



(4)

(.....)

